




NAME _____


DATE _____


IDENTIFICATION OF EVEN/ODD

Recognition of numbers either even / odd.

1) Use the objects to create an array with 2 row.

| | | |
|---|---|--|
| <p>A)</p>  | <p>Array with 2 rows.</p> <p>This is an even / odd number of stars.</p> | <p>Redraw your picture with 1 less star.</p> <p>This is an even / odd number of stars.</p> |
|---|---|--|

| | | |
|---|---|--|
| <p>B)</p>  | <p>Array with 2 rows.</p> <p>This is an even / odd number of stars.</p> | <p>Redraw your picture with 1 less star.</p> <p>This is an even / odd number of stars.</p> |
|---|---|--|

| | | |
|---|---|--|
| <p>C)</p>  | <p>Array with 2 rows.</p> <p>This is an even / odd number of stars.</p> | <p>Redraw your picture with 1 more star.</p> <p>This is an even / odd number of stars.</p> |
|---|---|--|